





practice Midterm exam

Homestead Choir


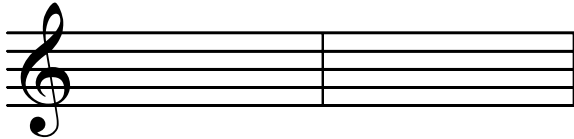
What are the letter names of the spaces of each clef?



Identify the following notes:



Draw the following notes:



How can you find DO for a sharp key?:

How can you find DO for a flat key?:

For the following examples, identify the key and write in the note for "Do".




example: D

For the following examples, identify the key and write the solfège under each note:



Key: _____

NOTICE THE CLEF CHANGE



Key: _____

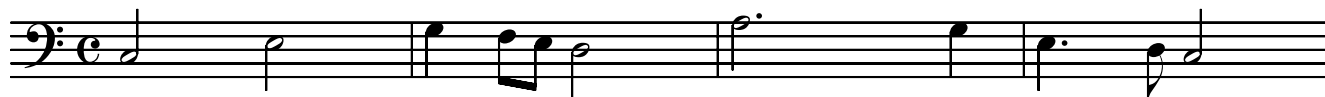
Write in the solfege for the hand symbol of each demonstrated by Mr Morton:

1 _____ 2 _____ 3 _____ 4 _____ 5 _____


The following notes or rests receive how many counts in $\frac{4}{4}$ meter?



Write in the counts for the following:



For the following example, write in the solfege above the notes and the counts below the notes for the part that you sing. Bb is "DO".



no, no joy is a - bove The plea-sure, the plea-sure, the plea - sure of love.

no, no joy is a - bove The plea-sure, the plea-sure, the plea - sure of love.

no, no joy is a - bove The plea-sure, the plea-sure, the plea - sure of love.

no, no joy is a - bove The plea-sure, the plea-sure, the plea - sure of love.

Practice Keyboard Quiz

Write the note for each key. Write the alphabet letter on the line. For black notes, list both choices.

The diagram shows a piano keyboard with four groups of three black keys. Arrows point from the following keys to the staves below:

- Group 1: Arrow from the first white key (C) to the bass staff.
- Group 2: Arrow from the second black key (D#) to the bass staff.
- Group 3: Arrow from the first white key (C) to the treble staff.
- Group 4: Arrow from the second black key (D#) to the treble staff.
- Group 5: Arrow from the first white key (C) to the treble staff.

Below the bass staff are three blank lines for writing the note name and three blank lines for writing the alphabet letter. Below the treble staff are three blank lines for writing the note name and three blank lines for writing the alphabet letter.


Draw an arrow from each note to its key. Write the alphabet letter on the line.

The diagram shows a piano keyboard with four groups of three black keys. Arrows point from the following keys to the staves below:

- Group 1: Arrow from the first white key (C) to the bass staff.
- Group 2: Arrow from the second black key (D#) to the bass staff.
- Group 3: Arrow from the first white key (C) to the treble staff.
- Group 4: Arrow from the second black key (D#) to the treble staff.
- Group 5: Arrow from the first white key (C) to the treble staff.

Below the bass staff are two blank lines for writing the alphabet letter. Below the treble staff are two blank lines for writing the alphabet letter.

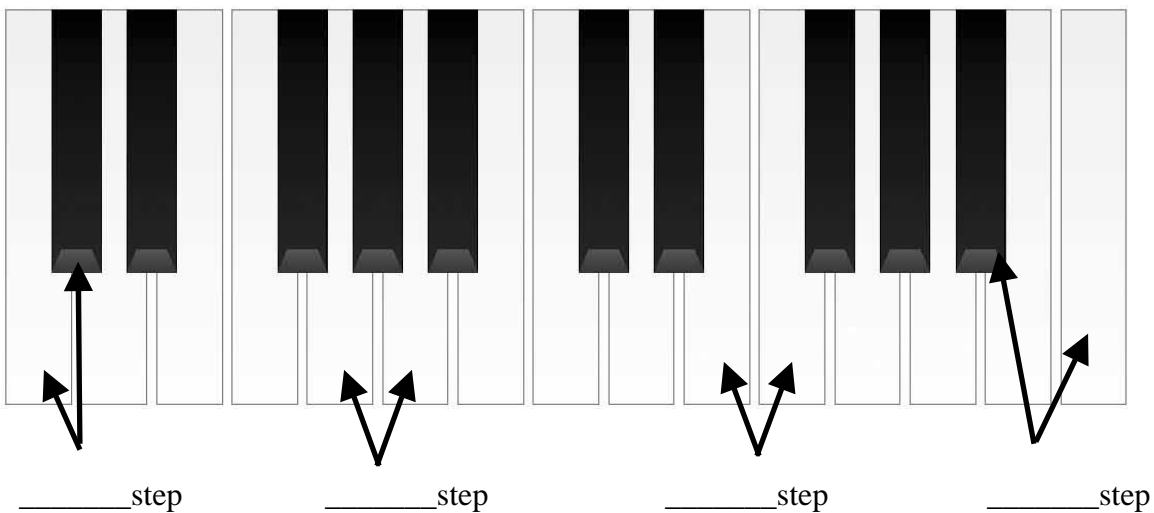
Practice Keyboard Quiz continued



Label A \sharp above. What is an enharmonic equivalent to A \sharp ? _____

Label G \flat above. What is an enharmonic equivalent to G \flat ? _____

Identify as a Whole step or half step.



From A \flat to G is a _____ step.

From C \sharp to D \sharp is a _____ step.

From E \flat to F is a _____ step.

From A to B \flat is a _____ step.

Keyboard Quiz

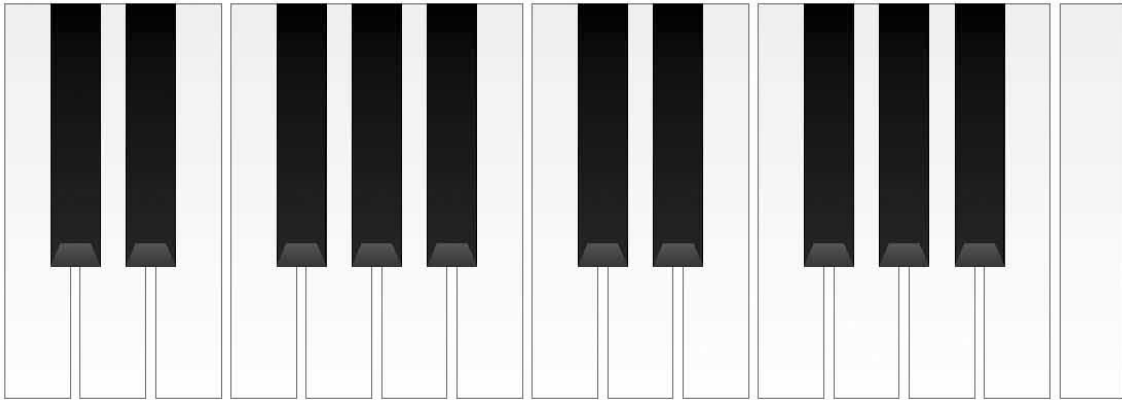
Write the note for each key. Write the alphabet letter on the line. For black notes, list both choices.

The diagram shows a section of a piano keyboard with four groups of three black keys. Arrows point to the following keys: the second white key in the first group, the first white key in the second group, the second white key in the third group, the first white key in the fourth group, and the third white key in the fifth group. Below the keyboard are two musical staves. The left staff has a bass clef and two blank lines underneath. The right staff has a treble clef and two blank lines underneath.

Draw an arrow from each note to its key. Write the alphabet letter on the line.

The diagram shows a section of a piano keyboard. Below it are two musical staves. The left staff has a bass clef and two notes: one on the first space (F) and one on the second line (G) with a flat sign. The right staff has a treble clef and two notes: one on the first space (F) with a sharp sign and one on the second line (G). Below each staff are two blank lines for writing the note name.

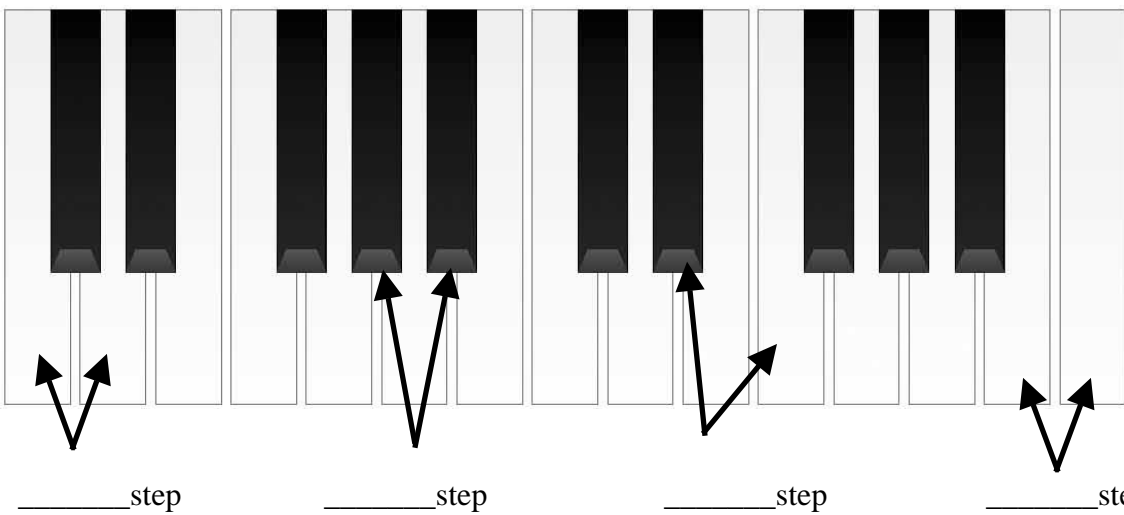
Keyboard Quiz continued



Label G# above. What is an enharmonic equivalent to G#? _____

Label Db above. What is an enharmonic equivalent to Db? _____

Identify as a Whole step or half step.



From F to G is a _____ step.

From B \flat to C is a _____ step.

From E to F# is a _____ step.

From A \flat to G is a _____ step.

QUIZ- keys, minor, and rhythm

Identify the following Major keys:



What is the rule for naming a sharp key:

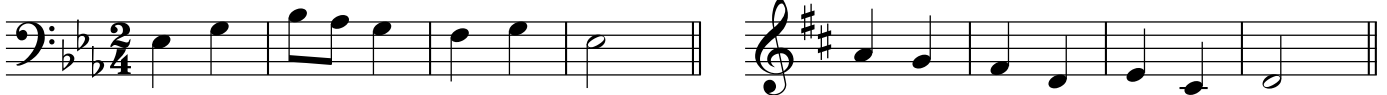
What is the rule for naming a flat key:

4




Identify the key, and then write in the solfege for the following:

7



Dictation:

15



Write how to count each of the following:

23




27



Dictation:

31



1 e & a 2 e & a 1 e & a 2 e & a

1 2 3 4 5 6

1 2 3 4 5 6